

STANDARD: SR.K.G

SUBJECT: MATHS

YEAR: 2020-2021

Note:-



1. Kindly do the following exercise in the notebook No 4.
2. COUNT AND WRITE.
3. Kindly check the link given below:
4. <https://youtu.be/bpfLYmthJIE>
5. <https://youtu.be/bkoOEeT5h10>

Teaching point:-

Count and write:

- ❖ In math, to count can be defined as the act of determining the quantity or the total numbers of objects in a set or a group.
- ❖ Counting numbers are used to count objects.
- ❖ How to count?--- we can count on by saying by numbers while touching on each object once.
- ❖ For example, hand over the child a crayon and say, "this is one crayon." Give him two crayons and say," Here are two crayons."
- ❖ In same way, parents can point the objects in your house and count them for your child.
- ❖ For example:-

Count the objects given below and write the correct number

a. 	<u>8</u>
b. 	<u>3</u>

WORKSHEET:

Exercise:

Count the object and write the number:



















m.



n.



o.



p.



q.



r.



s.



t.

u.

v.

w.

Missing numbers (1-100)

- ❖ Missing numbers are the numbers that got missed in the given series of numbers with similar differences among them.
- ❖ Before starting the activity of missing numbers it is important that children should revise the numbers from starting.
- ❖ Parents are requested to revise their child the numbers and to speak along with them.
- ❖ After numbers revised with the help of the worksheet given below, allow the child to identify the series and to identify which numbers are missing in the series.

- ❖ After identifying make the child to answer the missing numbers in the series.
- ❖ For example:-

a. 3 <u>4</u> <u>5</u> <u>6</u> <u>7</u> <u>8</u> 9.
b. 87 <u>88</u> <u>89</u> <u>90</u> <u>91</u> <u>92</u> 93.

Exercise:-

Write the missing numbers (1-100):-

a. 1 _____ 6.

b. 15 _____ 21.

c. 37 _____ 43.

d. 52 _____ 58.

e. 69 _____ 75.

f. 86 _____ 92.

g. 94 _____ 100.

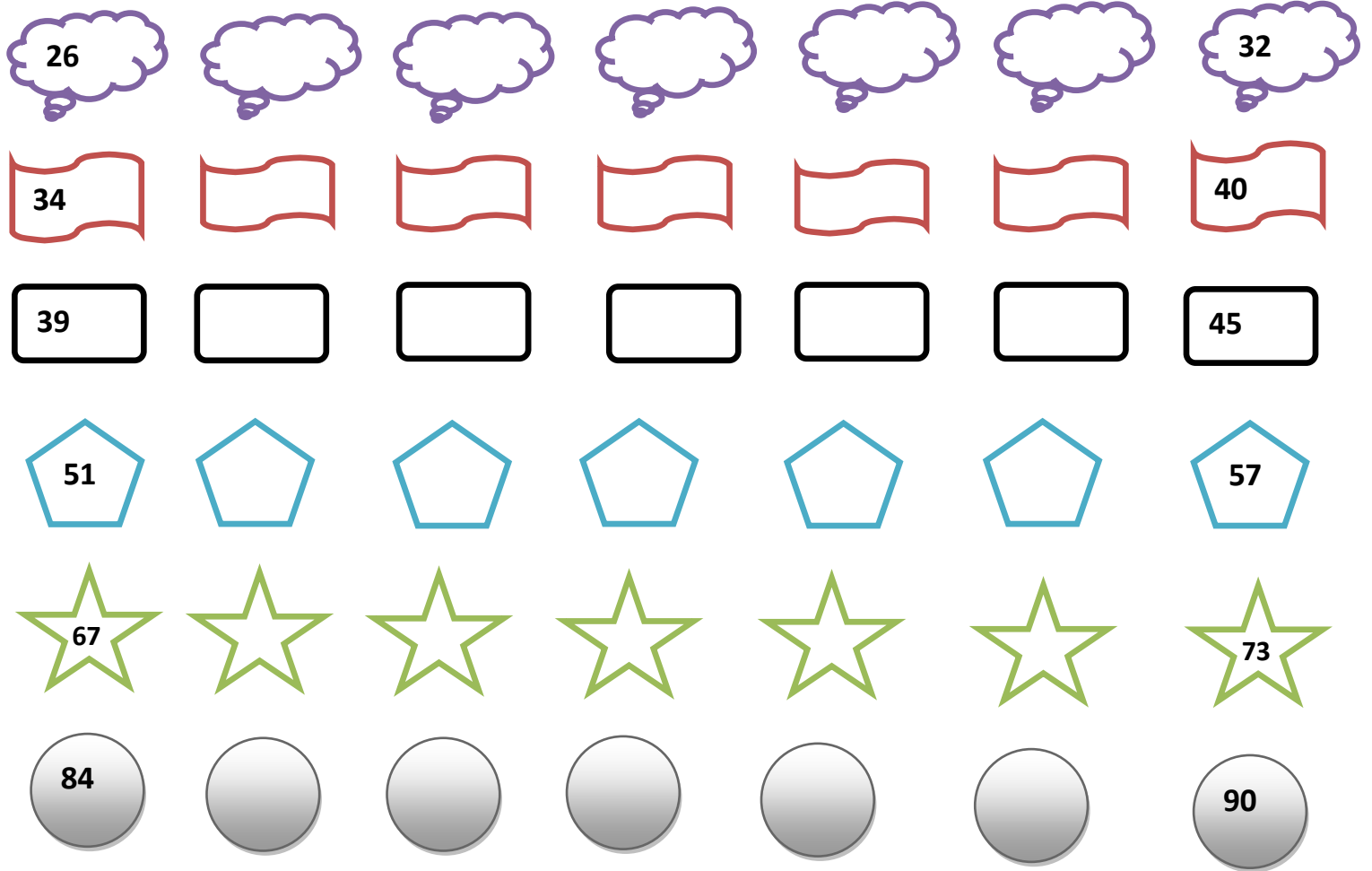
Kindly follow the below link:

<https://youtu.be/aOLclDaeGsc>



Write the missing numbers.





❖ ANSWERS

Exercise answers:

Count the object and write the number:

- a. 6
- b. 10
- c. 13
- d. 7

e.3

f.5

g.15

h. 7

i. 3

j. 14

k. 4

l. 6

m. 8

n. 10

o. 12

p. 5

q. 1

r.20

s.18

t.15

u.13

v.5

w.19

Write the missing numbers:-

a. 2 3 4 5.

b. 16 17 18 19 20.

c. 38 39 40 41 42.

d. 53 54 55 56 57.

e. 70 71 72 73 74.

f. 87 88 89 90 91.

g. 95 96 97 98 99.

Work sheet answers:-

Count and write:

❖ Missing numbers:

13 14 15 16 17 18 19

26 27 28 29 30 31 32

34 35 36 37 38 39 40

39 40 41 42 43 44 45

51 52 53 54 55 56 57

67 68 69 70 71 72 73

84 85 86 87 88 89 90